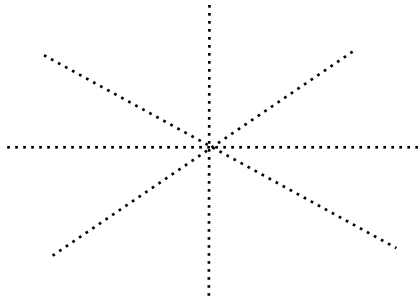


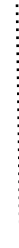
A flower that has FOUR symmetries



A crawling Insect that has linear symmetry



A seed from a tree that has its own wings.



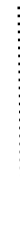
Which way does a moth or butterfly show its line of symmetry? median or diagonal?



Hunt for each natural item mentioned in the boxes.

Draw them in the space provided.  
Use a nature guide book to help you if you need it.


A Common Mussel - called a 'Bivalve' because it has 2 halves



Do you think your own face shows a type of symmetry?



Find three different leaves that show bilateral symmetry



# Reflective Symmetry in Nature Hunt